


# Find a quarter (2)

I Circle a quarter of each group.

a)




A quarter of 4 is

b)



A quarter of 12 is

c)



A quarter of 20 is





2 Complete the sentences.

a) Half of 12 is

A quarter of 12 is

b) Half of 16 is

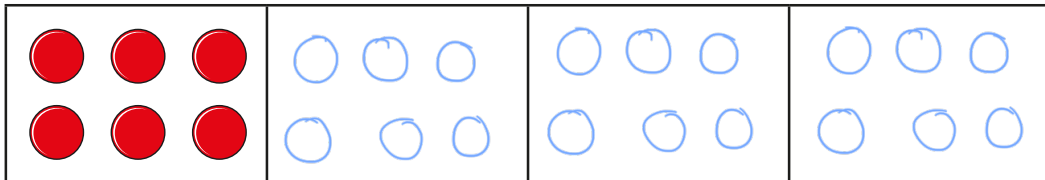
A quarter of 16 is

c) Half of 8 is

A quarter of 8 is

What do you notice?

3 A quarter is 6



What is the whole?

The whole is

