





















Learn your number bonds to 20 - you should be able to say the missing number quickly and without looking! For example -  $6 + \underline{\quad} = 20$ ;  $12 + \underline{\quad} = 20$ ;

## Number bonds to 20

	$1 + 19$		$19 + 1$
	$2 + 18$		$18 + 2$
	$3 + 17$		$17 + 3$
	$4 + 16$		$16 + 4$
	$5 + 15$		$15 + 5$
	$6 + 14$		$14 + 6$
	$7 + 13$		$13 + 7$
	$8 + 12$		$12 + 8$
	$9 + 11$		$11 + 9$
	$10 + 10$		$10 + 10$

